

Subtraction- Questions

Key Stage 2: 2003 Paper A

1.

5

Calculate **309 - 198**



5

1 mark

Key Stage 2: 2004 Paper A

1.

8

Calculate **13.6 - 2.8**



8

1 mark

Key Stage 2: 2005 Paper A

1.

1

Draw lines to join **all the pairs** of number cards which have a **difference of 30**

One has been done for you.



100	180
150	170
200	70
250	330
300	220

A line connects the number 100 to the number 70.

1i
1ii
2 marks

Key Stage 2: 2006 Paper A

1.

10

Calculate **2006 - 289**



10
1 mark

Key Stage 2: 2010 Paper A

1.

7

Calculate $336 - 192$



7
1 mark

Key Stage 2: 2012 Paper A

1.

7

Calculate $507 - 291$



7
1 mark

Key Stage 2: 2013 Paper B

1.

16

Write in the missing number.



$$164.5 - \boxed{} = 76.88$$

16
1 mark

Key Stage 2: 2014 Paper B

1.

11

Calculate $32.18 - 7.62$



11
1 mark

Key Stage 2: Paper 1 Arithmetic - Sample

1.

5	2 8 1 6 5 2	<input type="checkbox"/> 2 marks
	Show your method	

Key Stage 2: 2016 Paper 1 Arithmetic - Sample

1.

7	$472 - 9 =$	<input type="checkbox"/> 1 mark

Key Stage 2: 2016 Paper 1 Arithmetic - Sample

2.

14	$50,000 - 500 =$	<input type="text"/> 1 mark


Key Stage 2: 2016 Paper 1 Arithmetic - Sample

3.

22	$12 - 6.01 =$	<input type="text"/> 1 mark

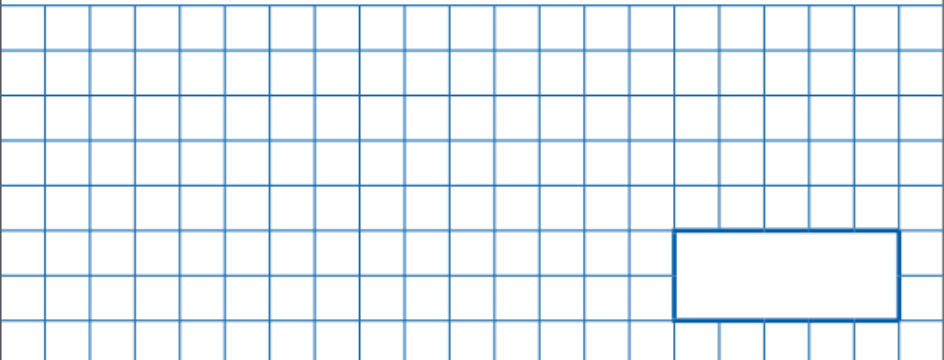
Key Stage 2: 2016 Paper 1 Arithmetic - Sample

4.

24	$15.4 - 8.88 =$	<input type="text"/>	1 mark
			


Key Stage 2: 2016 Paper 1 Arithmetic - Sample

5.

28	$234,897 - 45,996 =$	<input type="text"/>	1 mark
			


Key Stage 2: 2016 Paper 1 Arithmetic

1.

4	$468 - 9 =$	<input type="checkbox"/> 1 mark
		

Key Stage 2: 2016 Paper 1 Arithmetic

2.

8	<input type="text"/> = $435 - 30$	<input type="checkbox"/> 1 mark
		

Key Stage 2: 2016 Paper 1 Arithmetic

3.

17	$125.48 - 72.3 =$	<input type="text"/>	<input type="checkbox"/> 1 mark

Key Stage 2: 2016 Paper 1 Arithmetic

4.

18	$122,456 - 11,999 =$	<input type="text"/>	<input type="checkbox"/> 1 mark

Key Stage 2: 2016 Paper 1 Arithmetic

5.

21	$4 - 1.15 =$	<input type="text"/>	1 mark

Key Stage 2: 2017 Paper 1 Arithmetic

1.

5	$345 - 60 =$	<input type="text"/>	1 mark

Key Stage 2: 2017 Paper 1 Arithmetic

2.

12	$\frac{62}{100} - \frac{38}{100} =$	<input type="text"/>	1 mark

Key Stage 2: 2017 Paper 1 Arithmetic

3.

13	<input type="text"/> - 100 = 1,059	<input type="text"/>	1 mark

Key Stage 2: 2018 Paper 1 Arithmetic

5.

26	$6 - 5.738 =$	<input type="text"/>	1 mark

Key Stage 2: 2019 Paper 1 Arithmetic

1.

11	<input type="text"/> = $87 - 65$	<input type="text"/>	1 mark

Key Stage 2: 2019 Paper 1 Arithmetic

2.


12	$602 - \boxed{} = 594$	<input type="checkbox"/> 1 mark

Key Stage 2: 2019 Paper 1 Arithmetic

3.

19	$7 - 2.25 =$	<input type="checkbox"/> 1 mark

4.

21	$9 - 1.9 =$ 	<input data-bbox="1305 674 1369 741" type="checkbox"/> 1 mark
-----------	---	--